





23. Caesar is working on the graph below. He knows that 10 dogs were adopted from the Humane Society in June.

Dogs Adopted from the Humane Society

March	
April	
May	
June	

Each  means 2 dogs.

How many more dogs does Caesar need to add to June to complete the graph?

- A. 3
- B. 5
- C. 10
- D. 6