





23. Caesar is working on the graph below. He knows that 10 dogs were adopted from the Humane Society in June.

### Dogs Adopted from the Humane Society

<b>March</b>	
<b>April</b>	
<b>May</b>	
<b>June</b>	

Each  means 2 dogs.

How many more dogs does Caesar need to add to June to complete the graph?

- A. 3
- B. 5
- C. 10
- D. 6